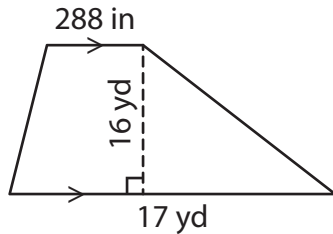


Name : _____

Area of a Quadrilateral

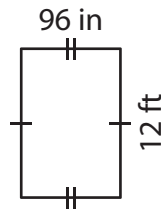
Find the area of each shape. Round your answer to two decimal places.

1)



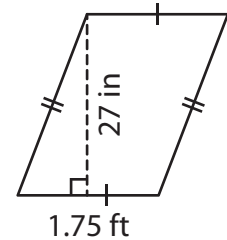
Area = _____

2)

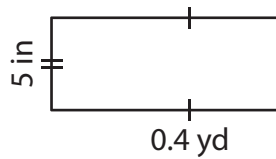


Area = _____ in²

3)



4)



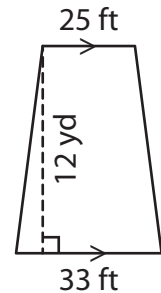
Area = _____

Gain complete access to the largest collection of worksheets in all subjects!

Members, please log in to download this worksheet.

Not a member? Please sign up to gain complete access.

www.mathworksheets4kids.com



Area = _____ ft²

7) The base of a parallelogram is _____

the area of the parallelogram is _____

_____ square feet

8) The parallel bases of a trapezoid measure 15 inches and 2 feet. If the perpendicular distance between the bases is 17 inches, find the area of the trapezoid.

_____ square inches