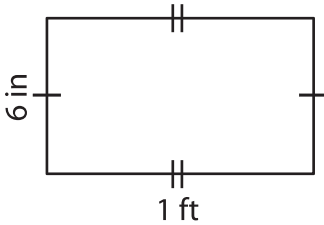


Name : \_\_\_\_\_

## Area of a Quadrilateral

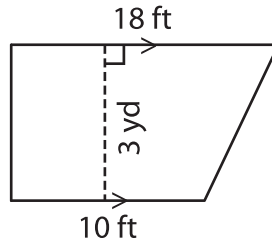
Find the area of each shape. Round your answer to two decimal places.

1)

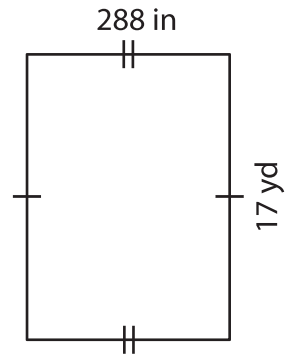


Area = \_\_\_\_\_

2)

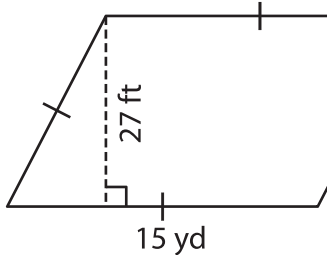


3)



Area = \_\_\_\_\_ yd<sup>2</sup>

4)



Area = \_\_\_\_\_

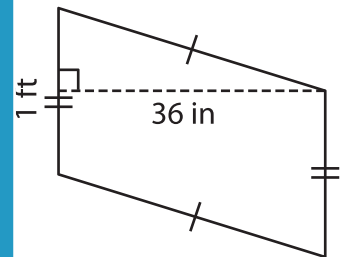
**PREVIEW**

Gain complete access to the largest collection of worksheets in all subjects!

Members, please log in to download this worksheet.

Not a member? Please sign up to gain complete access.

[www.mathworksheets4kids.com](http://www.mathworksheets4kids.com)



Area = \_\_\_\_\_ in<sup>2</sup>

7) The parallel bases of a trapezoid are 12 yards and 18 yards. The perpendicular distance between the bases is 4 yards, find the area.

\_\_\_\_\_ square yards

8) The length and width of a rectangle are 47 feet and 12 yards respectively. Determine the area of the rectangle .

\_\_\_\_\_ square feet