

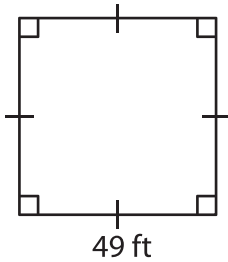
Name : _____

Area – Quadrilateral

L2S1

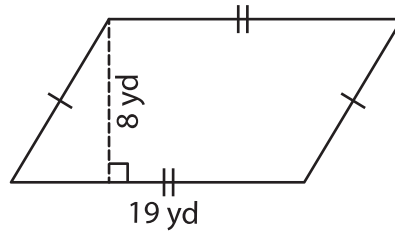
Find the area of each quadrilateral.

1)



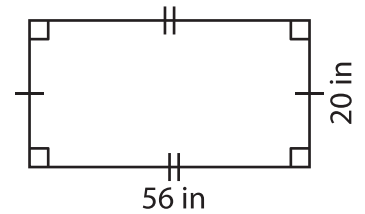
Area = _____

2)



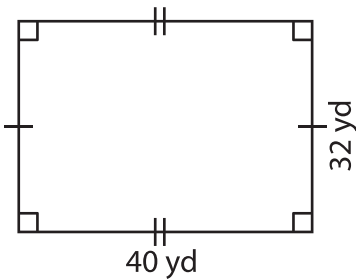
Area = _____

3)



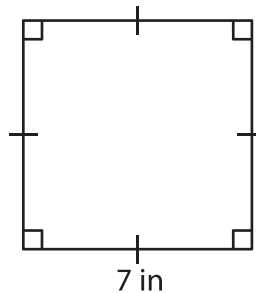
Area = _____

4)



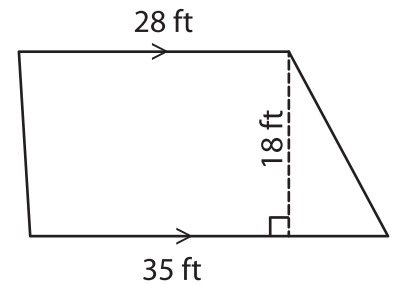
Area = _____

5)



Area = _____

6)



Area = _____

- 7) The sum of the lengths of the bases and the height of a trapezoid are 13 inches and 6 inches respectively. Determine the area of the trapezoid.

- 8) A parallelogram has a height of 3 feet and a base of 4 feet. What is the area of the parallelogram?
