

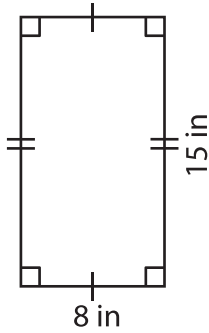
Name : _____

Area – Quadrilateral

L2S3

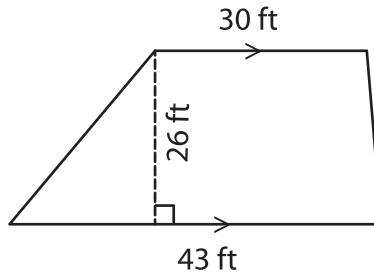
Find the area of each quadrilateral.

1)



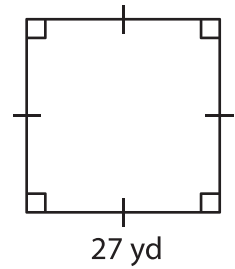
Area = _____

2)

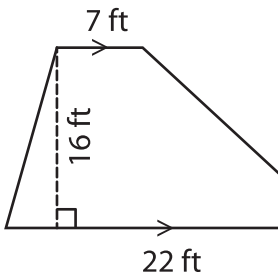


Area = _____

3)



4)



Area = _____

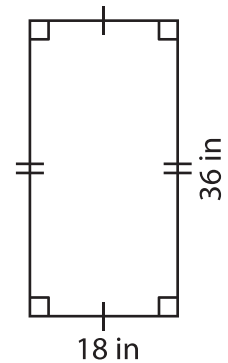
PREVIEW

Gain complete access to the largest collection of worksheets in all subjects!

Members, please log in to download this worksheet.

Not a member? Please sign up to gain complete access.

www.mathworksheets4kids.com



Area = _____

7) Determine the area of a parallelogram with a base of 13 feet and a height of 10 feet respectively.

Area = _____

8) If the side of a square measures 42 inches, find the area of the square.

Area = _____