

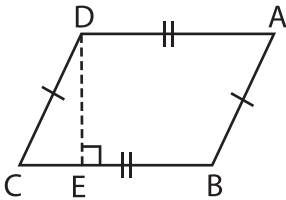
Name : _____

Area – Quadrilateral

L3T2S3

Find the area of each quadrilateral.

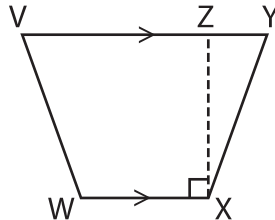
1)



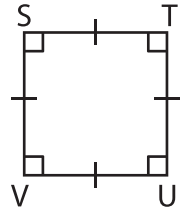
DA = 22 ft ; DE = 15 ft

Area =

2)



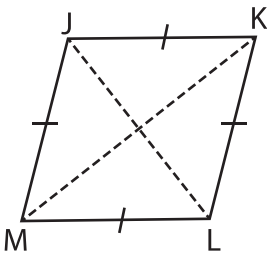
3)



SV = 13 yd

Area =

4)



JL = 10 yd ; KM = 14 yd

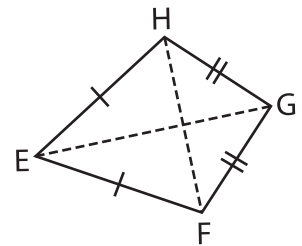
Area =

PREVIEW
Gain complete access to the largest collection of worksheets in all subjects!

Members, please log in to download this worksheet.

Not a member? Please sign up to gain complete access.

www.mathworksheets4kids.com



EG = 22 in ; FH = 19 in

Area =

7) The length and width of a rectangle are 12 feet and 8 feet, respectively. Determine the area of the rectangle.

ly. Determine the area of the

8) The side of a square measures 8 feet. What is the area of the square?