

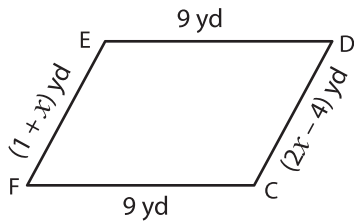
Name: _____

L1S1

Sides of a Quadrilateral

Solve for x and find the indicated side lengths.

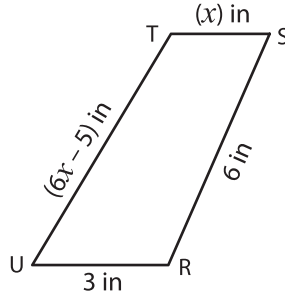
1)



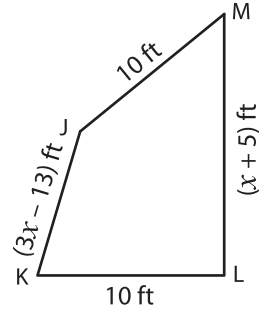
Perimeter = 30 yd ; $x =$ _____

EF = _____ ; CD = _____

2)



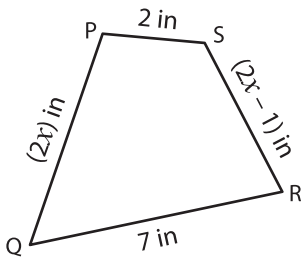
3)



Perimeter = 40 ft ; $x =$ _____

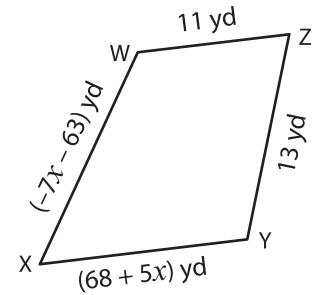
K = _____ ; LM = _____

4)



Perimeter = 20 in ; $x =$ _____

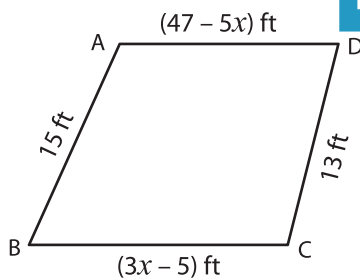
PQ = _____ ; RS = _____



Perimeter = 51 yd ; $x =$ _____

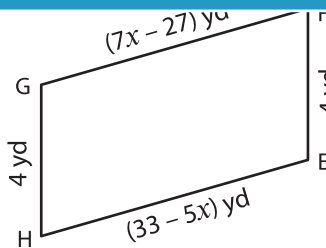
X = _____ ; XY = _____

7)



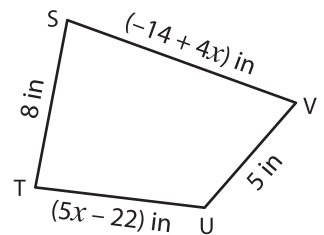
Perimeter = 56 ft ; $x =$ _____

AD = _____ ; BC = _____



Perimeter = 24 yd ; $x =$ _____

FG = _____ ; EH = _____



Perimeter = 31 in ; $x =$ _____

SV = _____ ; TU = _____

PREVIEW

Gain complete access to the largest collection of worksheets in all subjects!

Members, please log in to download this worksheet.

Not a member? Please sign up to gain complete access.

www.mathworksheets4kids.com