

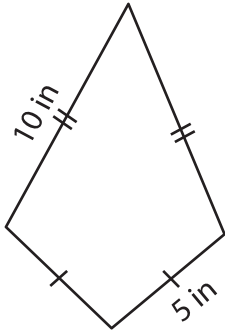
Name : _____

Perimeter of a Quadrilateral

Congruent sides: S3

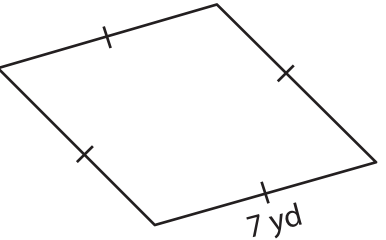
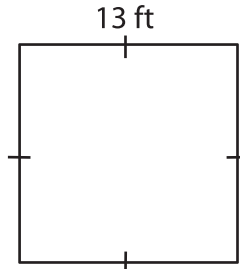
Find the perimeter of each quadrilateral.

1)



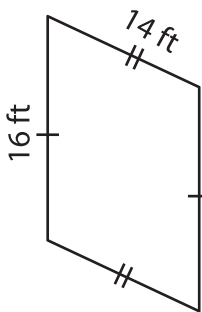
Perimeter = _____

2)



Perimeter = _____

4)



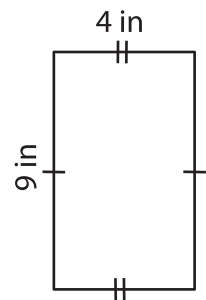
Perimeter = _____

Gain complete access to the largest collection of worksheets in all subjects!

Members, please log in to download this worksheet.

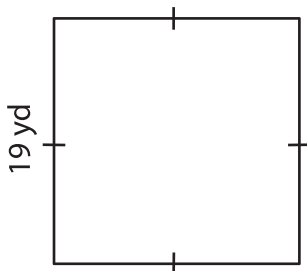
Not a member? Please sign up to gain complete access.

www.mathworksheets4kids.com

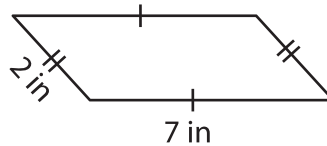


Perimeter = _____

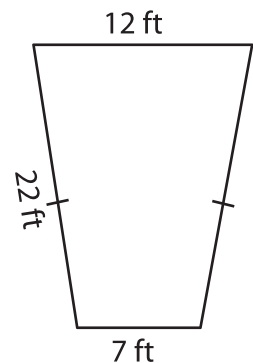
7)



Perimeter = _____



Perimeter = _____



Perimeter = _____