

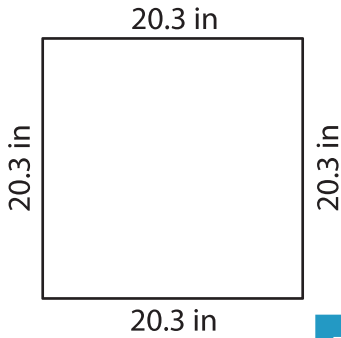
Name : _____

T2S3

Perimeter of a Quadrilateral

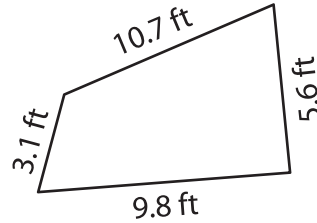
Find the perimeter of each quadrilateral.

1)

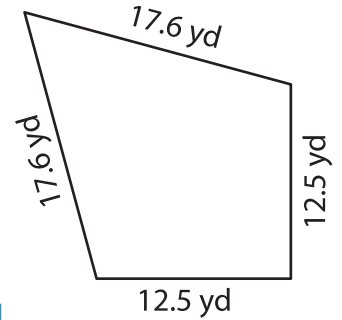


Perimeter = _____

2)

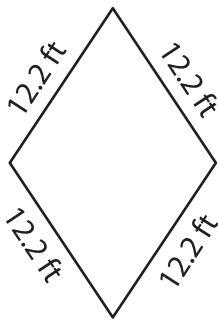


3)



Perimeter = _____

4)



Perimeter = _____

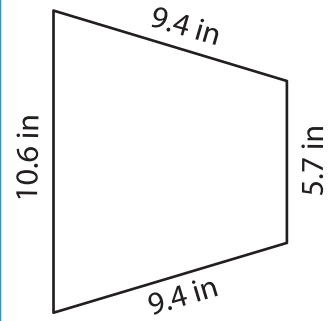
PREVIEW

Gain complete access to the largest collection of worksheets in all subjects!

Members, please log in to download this worksheet.

Not a member? Please sign up to gain complete access.

www.mathworksheets4kids.com



Perimeter = _____

7) The side of a rhombus m

rhombus.

8) The length of a rectangle is 7.3 yards. What is the perimeter of the rectangle, if the width is 4.1 yards?
