

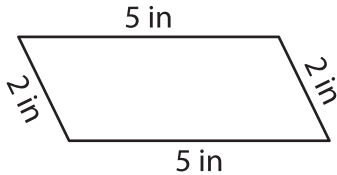
Name: _____

Perimeter of a Quadrilateral

T1L1S2

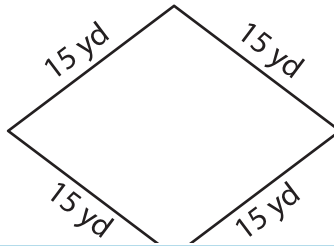
Find the perimeter of each quadrilateral.

1)



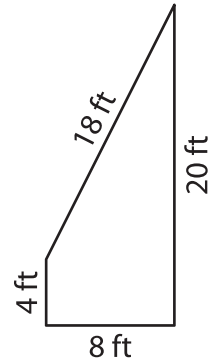
Perimeter = _____

2)

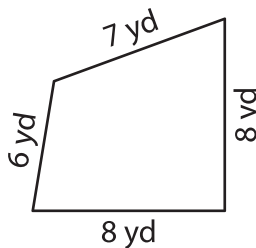


Perimeter = _____

3)



4)



Perimeter = _____

Gain complete access to the largest collection of worksheets in all subjects!

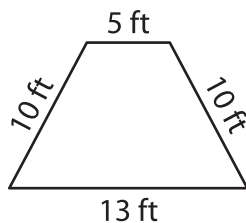
Members, please log in to download this worksheet.

Not a member? Please sign up to gain complete access.

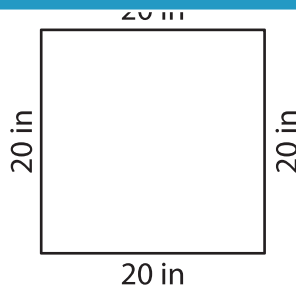
www.mathworksheets4kids.com

Perimeter = _____

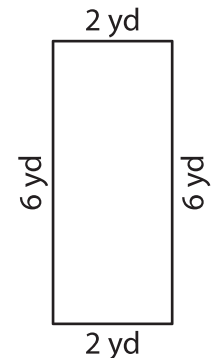
7)



Perimeter = _____



Perimeter = _____



Perimeter = _____