

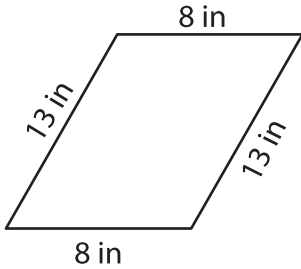
Name : _____

Perimeter of a Quadrilateral

T2L1S1

Find the perimeter of each quadrilateral.

1)

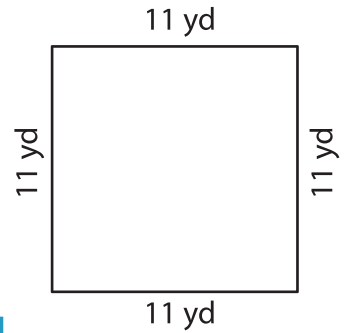


Perimeter = _____

2)

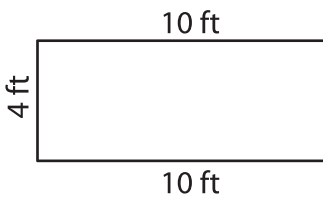


3)



Perimeter = _____

4)



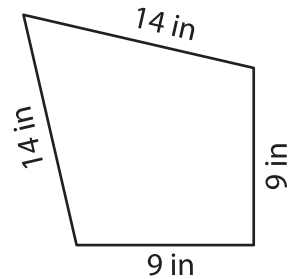
Perimeter = _____

PREVIEW
Gain complete access to the largest collection of worksheets in all subjects!

Members, please log in to download this worksheet.

Not a member? Please sign up to gain complete access.

www.mathworksheets4kids.com



Perimeter = _____

7) Find the perimeter of a trapezoid with a top side of 9 yards and a bottom side of 3 yards respectively.

Perimeter = _____

8) If the side of a square measures 13 inches, determine the perimeter of the square.