

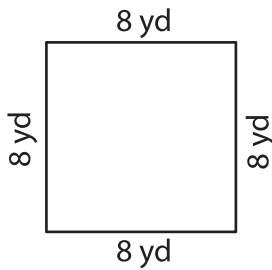
Name : _____

Perimeter of a Quadrilateral

T2L1S3

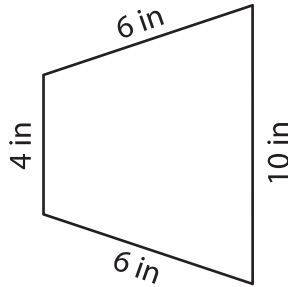
Find the perimeter of each quadrilateral.

1)



Perimeter = _____

2)

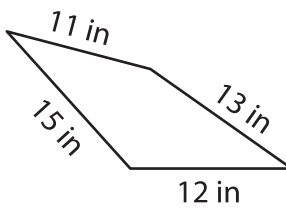


3)



Perimeter = _____

4)



Perimeter = _____

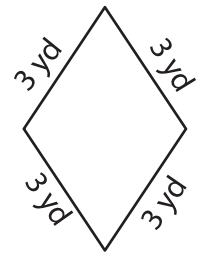
PREVIEW

Gain complete access to the largest collection of worksheets in all subjects!

Members, please log in to download this worksheet.

Not a member? Please sign up to gain complete access.

www.mathworksheets4kids.com



Perimeter = _____

7) The adjacent sides of a parallelogram are 12 in and 15 in. Find the perimeter of the parallelogram.

Perimeter = _____

8) The side of a rhombus measures 14 yards. What is the perimeter of the rhombus?