

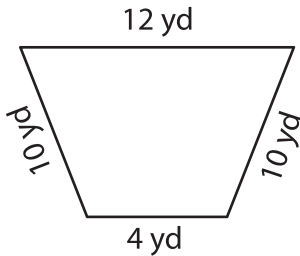
Name : _____

Perimeter of a Quadrilateral

T2L1S4

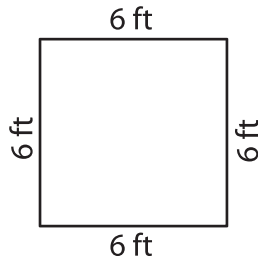
Find the perimeter of each quadrilateral.

1)

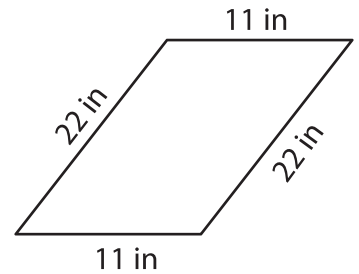


Perimeter = _____

2)

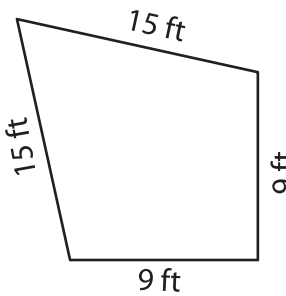


3)



Perimeter = _____

4)



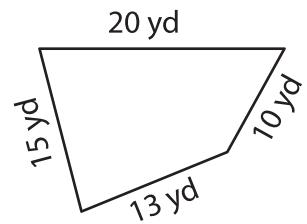
Perimeter = _____

PREVIEW
Gain complete access to the largest collection of worksheets in all subjects!

Members, please log in to download this worksheet.

Not a member? Please sign up to gain complete access.

www.mathworksheets4kids.com



Perimeter = _____

7) If the side of a rhombus r

ombus.

8) The lengths of the adjacent sides of a parallelogram are 13 feet and 17 feet. Determine the perimeter of the parallelogram.