

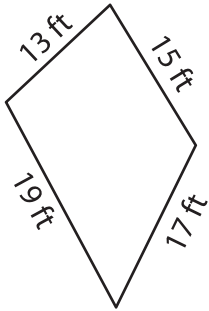
Name : _____

Perimeter of a Quadrilateral

T2L1S5

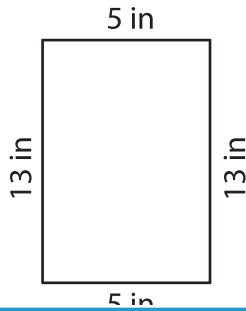
Find the perimeter of each quadrilateral.

1)

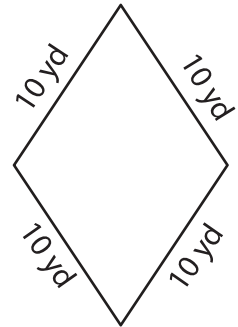


Perimeter = _____

2)

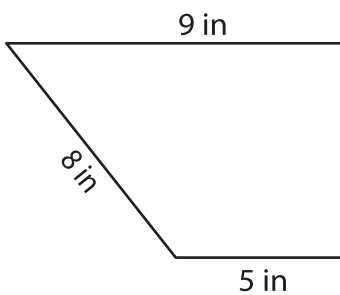


3)



Perimeter = _____

4)



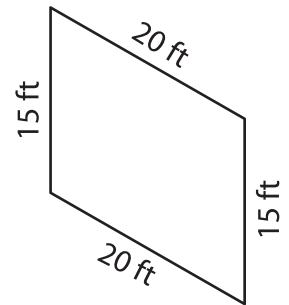
Perimeter = _____

PREVIEW
Gain complete access to the largest collection of worksheets in all subjects!

Members, please log in to download this worksheet.

Not a member? Please sign up to gain complete access.

www.mathworksheets4kids.com



Perimeter = _____

7) The side length of a square is 12 ft.

8) What is the perimeter of a trapezoid, if the side lengths of the trapezoid are 3 yards, 8 yards, 16 yards and 14 yards?
