

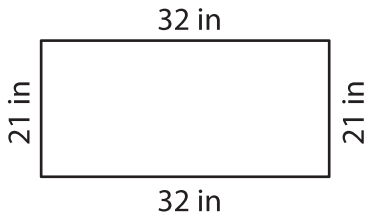
Name : \_\_\_\_\_

## Perimeter of a Quadrilateral

T2L2S1

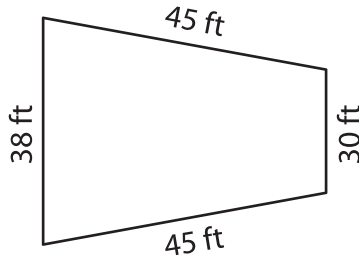
Find the perimeter of each quadrilateral.

1)

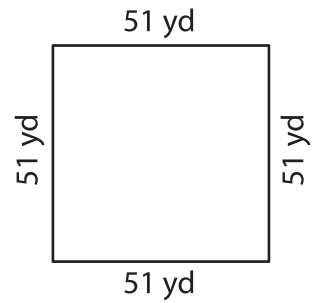


Perimeter = \_\_\_\_\_

2)

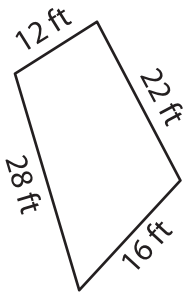


3)



Perimeter = \_\_\_\_\_

4)



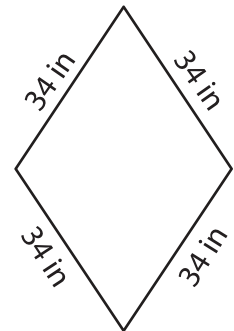
Perimeter = \_\_\_\_\_

**PREVIEW**  
Gain complete access to the largest collection of worksheets in all subjects!

Members, please log in to download this worksheet.

Not a member? Please sign up to gain complete access.

[www.mathworksheets4kids.com](http://www.mathworksheets4kids.com)



Perimeter = \_\_\_\_\_

7) The length of a rectangle

is 45 yards and the width is 28 yards?

\_\_\_\_\_

8) The adjacent sides of a parallelogram measure 57 inches and 36 inches. Determine the perimeter of the parallelogram.

\_\_\_\_\_