

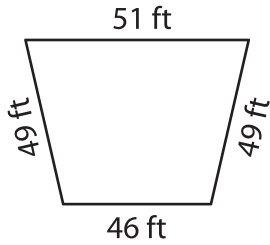
Name : _____

Perimeter of a Quadrilateral

T2L2S5

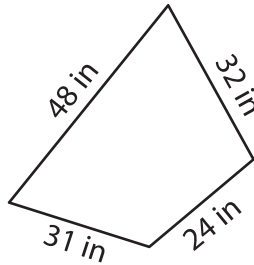
Find the perimeter of each quadrilateral.

1)

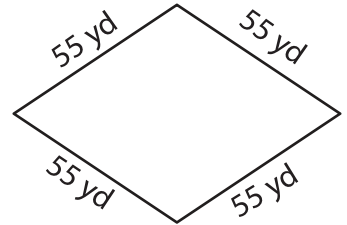


Perimeter = _____

2)

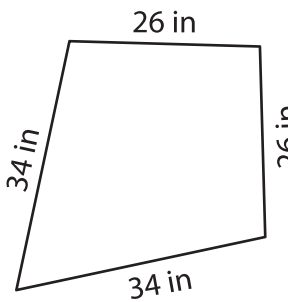


3)



Perimeter = _____

4)



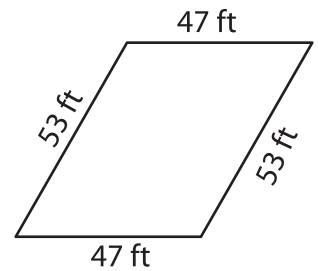
Perimeter = _____

PREVIEW
Gain complete access to the largest
collection of worksheets in all subjects!

Members, please
log in to
download this
worksheet.

Not a member?
Please sign up to
gain complete
access.

www.mathworksheets4kids.com



Perimeter = _____

7) Find the perimeter of the

ards.

8) The side length of a square is 28 feet. Determine the perimeter of the square.
