

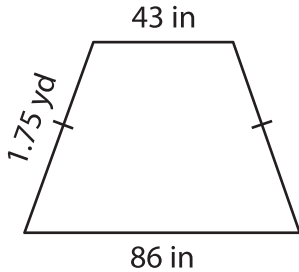
Name : _____

Perimeter of a Quadrilateral

Sheet 5

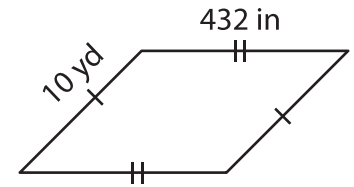
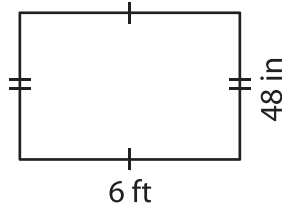
Find the perimeter of each quadrilateral.

1)



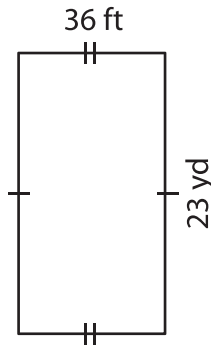
Perimeter = _____ i

2)



Perimeter = _____ yd

4)



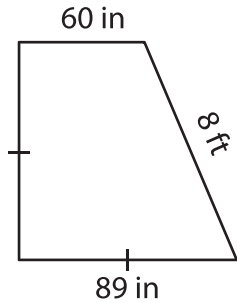
Perimeter = _____ f

PREVIEW
Gain complete access to the largest collection of worksheets in all subjects!

Members, please log in to download this worksheet.

Not a member? Please sign up to gain complete access.

www.mathworksheets4kids.com



Perimeter = _____ in

7) Determine the perimeter

yards.

_____ yards

8) Find the perimeter of the parallelogram, if the width is 7 yards, the length of a parallelogram is 14 feet.

_____ feet