

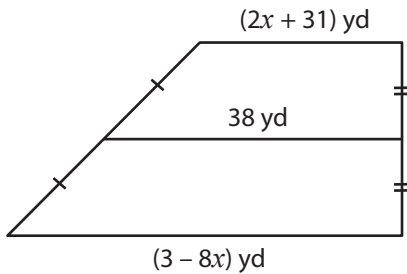
Name : _____

Trapezoids

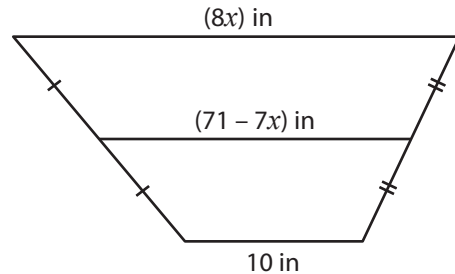
Sheet 2

A) Find the value of x .

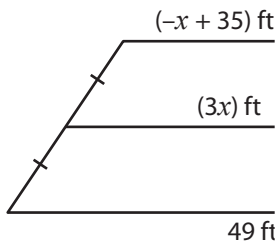
1)



2)



3)



$x =$ _____

$x =$ _____

PREVIEW

Gain complete access to the largest collection of worksheets in all subjects!

Members, please log in to download this worksheet.

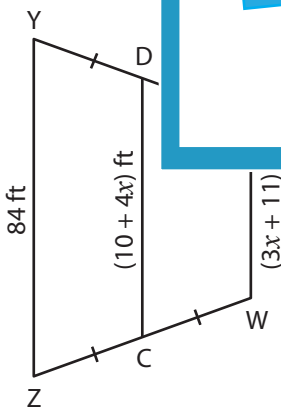
Not a member? Please sign up to gain complete access.

www.mathworksheets4kids.com

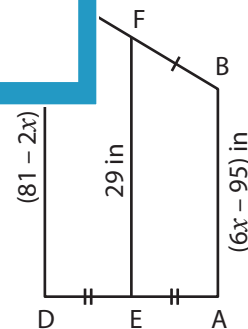


B) Solve for x and the

1)



$x =$ _____



$x =$ _____

CD = _____ ; WX = _____

AB = _____ ; CD = _____