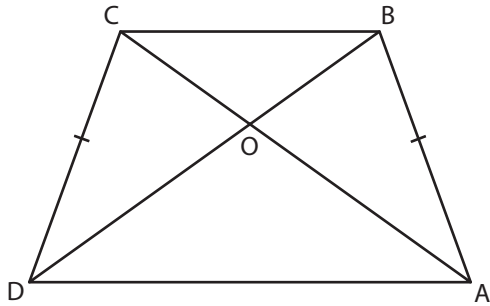


Name : _____

Isosceles Trapezoids

Find the indicated measure in each isosceles trapezoid.

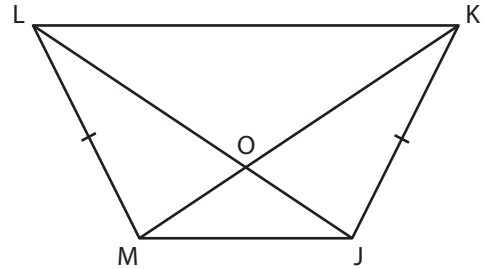
1)



$AC = 50$ ft ;

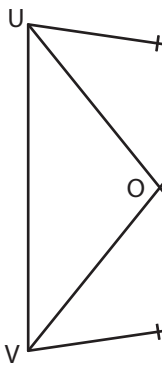
$OD =$ _____

2)



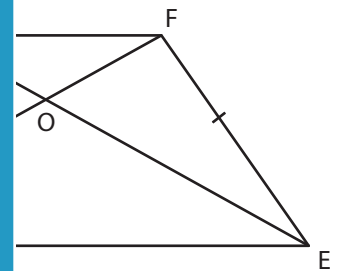
_____ ; $OL = 47$ in

3)



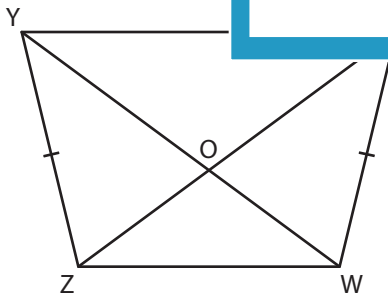
$OU = 40$ in ;

$TV =$ _____



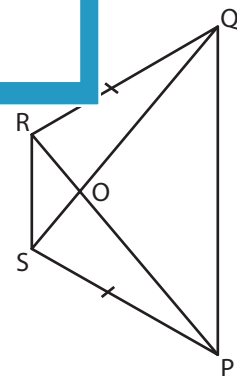
$G = 7$ yd

5)



$WY = 73$ yd ; $OZ = 20$ yd

$OX =$ _____



$OR = 12$ ft ; $OP = 33$ ft

$QS =$ _____

PREVIEW

Gain complete access to the largest collection of worksheets in all subjects!

Members, please log in to download this worksheet.

Not a member? Please sign up to gain complete access.

www.mathworksheets4kids.com