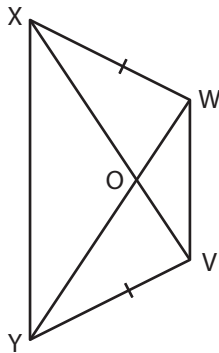


Isosceles Trapezoids

Find the indicated measure in each isosceles trapezoid.

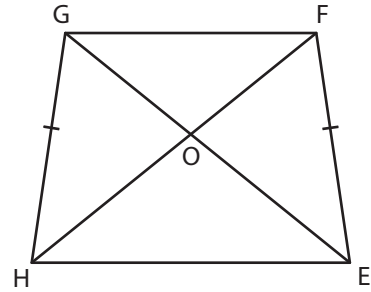
1)



OY = 4

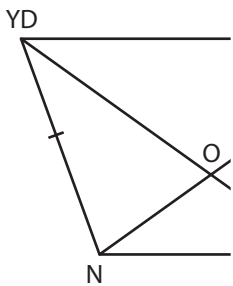
OX = _____

2)



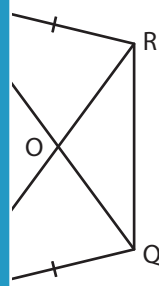
ft ; OF = 21 ft

3)



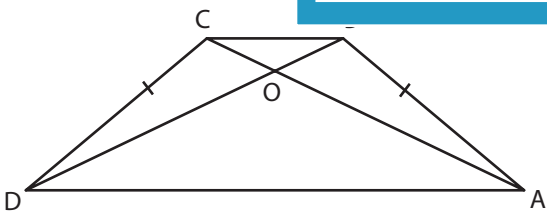
LN = 86 ft ;

OK = _____



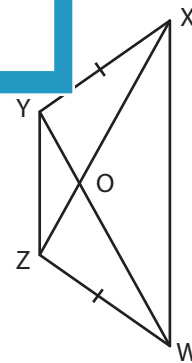
in ; OQ = 8 in

5)



OB = 20 in ; OA = 39 in

AC = _____



XZ = 68 yd ; OZ = 23 yd

OW = _____

PREVIEW

Gain complete access to the largest collection of worksheets in all subjects!

Members, please log in to download this worksheet.

Not a member? Please sign up to gain complete access.

www.mathworksheets4kids.com