

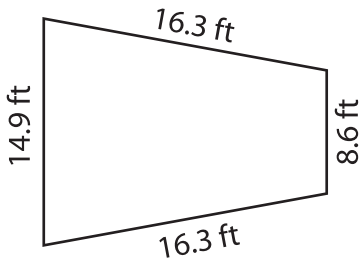
Name : \_\_\_\_\_

## Perimeter of a Trapezoid

Sheet 2

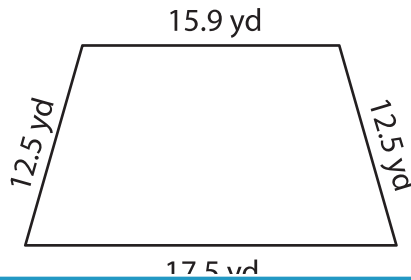
Find the perimeter of each trapezoid.

1)

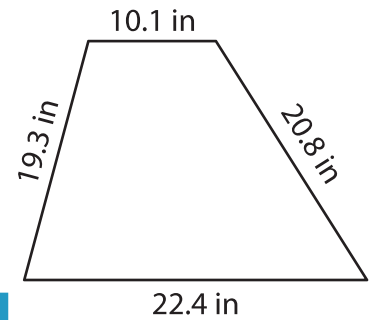


Perimeter = \_\_\_\_\_

2)

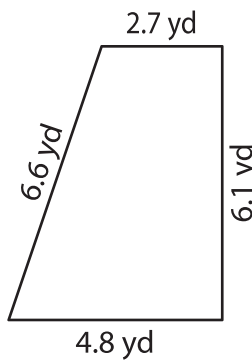


3)



Perimeter = \_\_\_\_\_

4)



Perimeter = \_\_\_\_\_

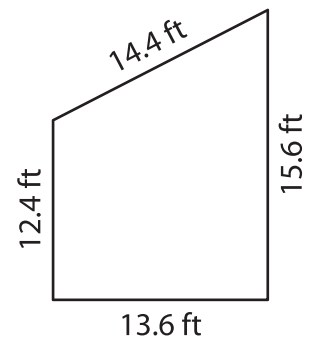
**PREVIEW**

Gain complete access to the largest collection of worksheets in all subjects!

Members, please log in to download this worksheet.

Not a member? Please sign up to gain complete access.

[www.mathworksheets4kids.com](http://www.mathworksheets4kids.com)



Perimeter = \_\_\_\_\_

7) The parallel bases of an isosceles trapezoid are 10.5 feet and 15.5 feet. The slanted sides are 8.5 feet each. Find the perimeter of the trapezoid.

\_\_\_\_\_

8) The sides of a trapezoid measure 10.7 feet, 15.4 feet, 3.4 feet and 8.5 feet. What is the perimeter of the trapezoid?

\_\_\_\_\_