

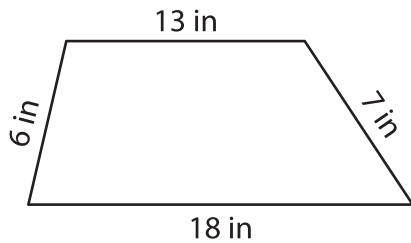
Name : _____

Perimeter of a Trapezoid

L1S1

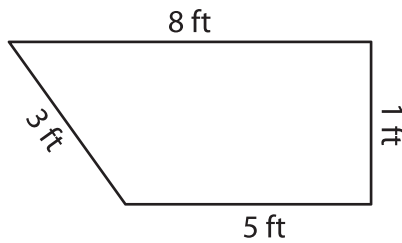
Find the perimeter of each trapezoid.

1)



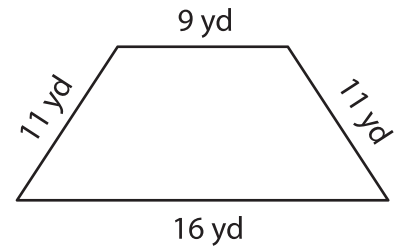
Perimeter = _____

2)



Perimeter = _____

3)



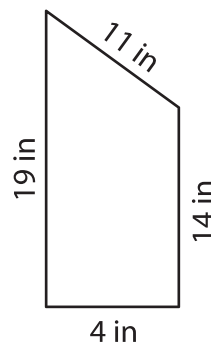
Perimeter = _____

4)



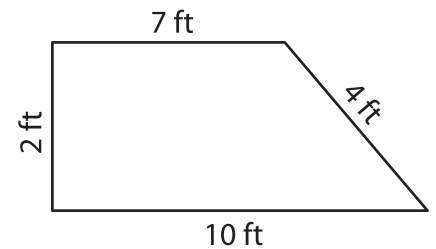
Perimeter = _____

5)



Perimeter = _____

6)



Perimeter = _____

7) If the sides of a trapezoid measure 12 inches, 15 inches, 17 inches and 20 inches, find its perimeter.

8) The parallel bases of a trapezoid measure 2 feet and 6 feet. If the legs measure 9 feet and 13 feet, determine the perimeter of the trapezoid.
