

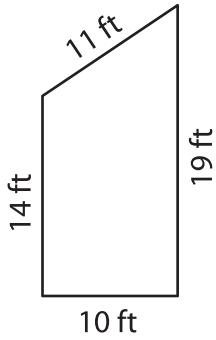
Name : _____

Perimeter of a Trapezoid

L1S2

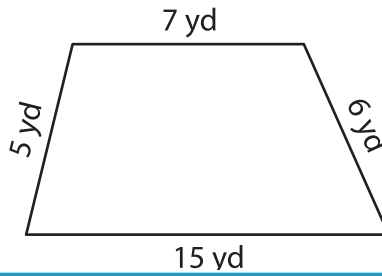
Find the perimeter of each trapezoid.

1)

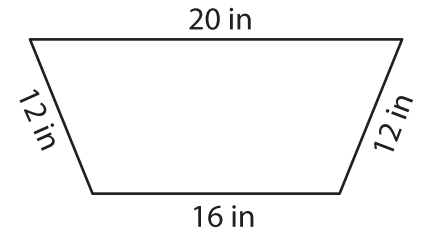


Perimeter = _____

2)

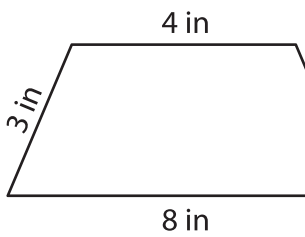


3)



Perimeter = _____

4)



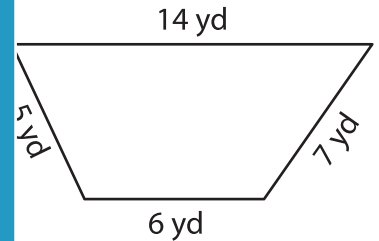
Perimeter = _____

PREVIEW
Gain complete access to the largest collection of worksheets in all subjects!

Members, please log in to download this worksheet.

Not a member? Please sign up to gain complete access.

www.mathworksheets4kids.com



Perimeter = _____

7) The parallel bases of an isosceles trapezoid are 10 feet and 14 feet. Each leg measures 17 feet.

Perimeter = _____

8) Find the perimeter of the trapezoid, if its sides measure 3 yards, 9 yards, 6 yards and 11 yards.