

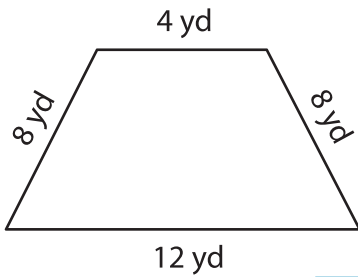
Name : _____

L1S3

Perimeter of a Trapezoid

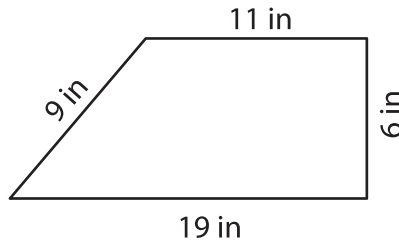
Find the perimeter of each trapezoid.

1)

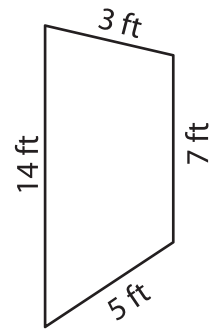


Perimeter = _____

2)

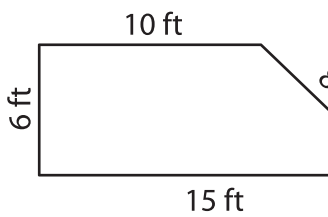


3)



Perimeter = _____

4)



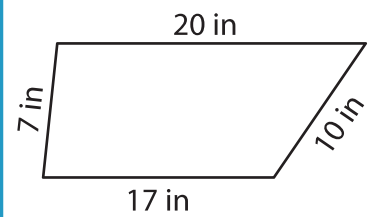
Perimeter = _____

PREVIEW
Gain complete access to the largest collection of worksheets in all subjects!

Members, please log in to download this worksheet.

Not a member? Please sign up to gain complete access.

www.mathworksheets4kids.com



Perimeter = _____

7) The sides of a trapezoid are 10, 15, 12, and 18. What is the perimeter of the trapezoid?

What is the perimeter of

8) The parallel bases of an isosceles trapezoid measure 6 inches and 8 inches. Find the perimeter of the isosceles trapezoid, if its each leg measures 5 inches.