

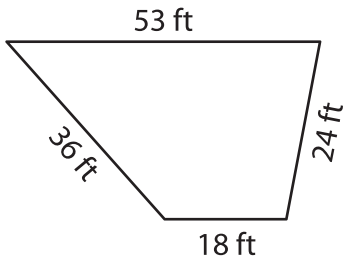
Name : \_\_\_\_\_

L2S1

## Perimeter of a Trapezoid

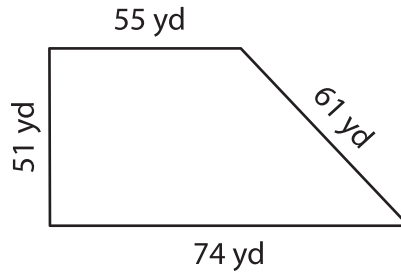
Find the perimeter of each trapezoid.

1)

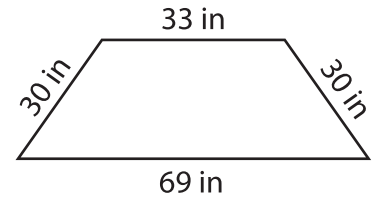


Perimeter = \_\_\_\_\_

2)

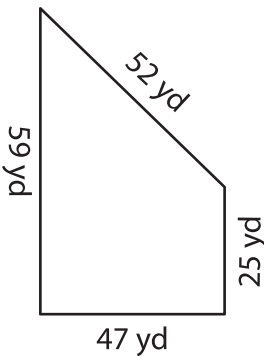


3)



Perimeter = \_\_\_\_\_

4)



Perimeter = \_\_\_\_\_

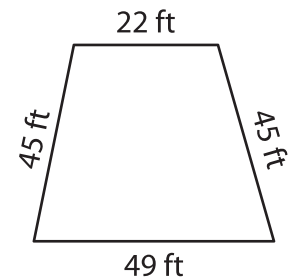
**PREVIEW**

Gain complete access to the largest collection of worksheets in all subjects!

Members, please log in to download this worksheet.

Not a member? Please sign up to gain complete access.

[www.mathworksheets4kids.com](http://www.mathworksheets4kids.com)



Perimeter = \_\_\_\_\_

7) The parallel bases of an isosceles trapezoid are 10 feet and 20 feet. Each leg measures 29 feet. Determine the perimeter.

Perimeter = \_\_\_\_\_

8) The sides of a trapezoid measure 89 yards, 72 yards, 43 yards and 54 yards. What is the perimeter of the trapezoid?