

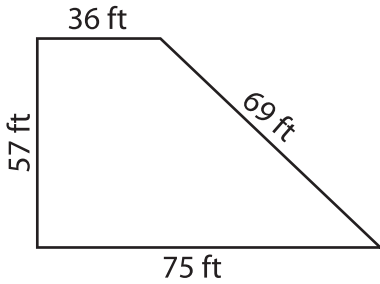
Name : _____

Perimeter of a Trapezoid

L2S4

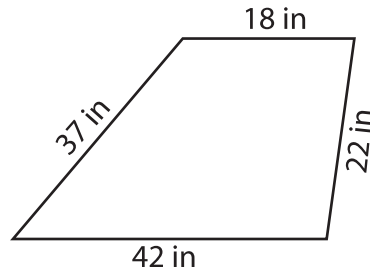
Find the perimeter of each trapezoid.

1)

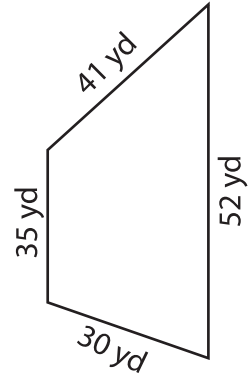


Perimeter = _____

2)

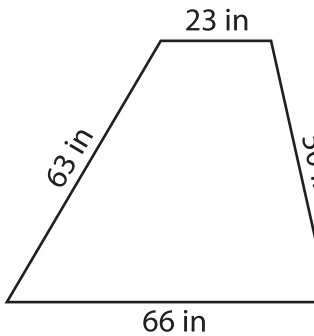


3)



Perimeter = _____

4)



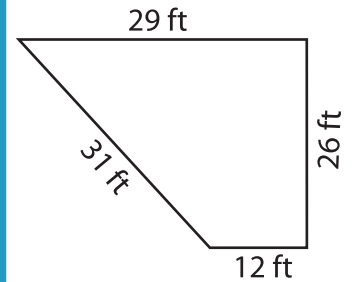
Perimeter = _____

PREVIEW
Gain complete access to the largest collection of worksheets in all subjects!

Members, please log in to download this worksheet.

Not a member? Please sign up to gain complete access.

www.mathworksheets4kids.com



Perimeter = _____

7) The parallel bases of a trapezoid measure 25 yards and 46 yards, determine the perimeter.

8) Find the perimeter of the trapezoid, if its sides measure 80 feet, 40 feet, 13 feet and 32 feet.
