

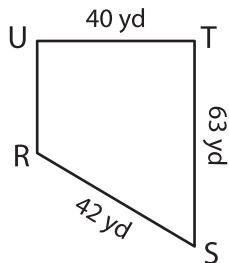
Name : _____

Perimeter of a Trapezoid

Sheet 3

Find the missing side length of each trapezoid.

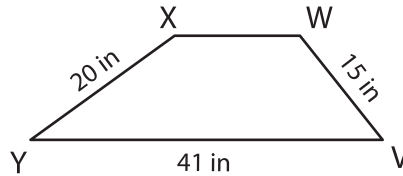
1)



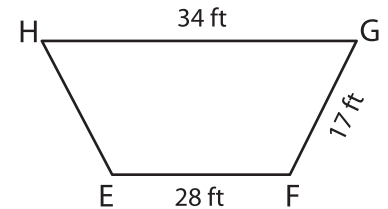
Perimeter = 175 yd

UR = _____

2)



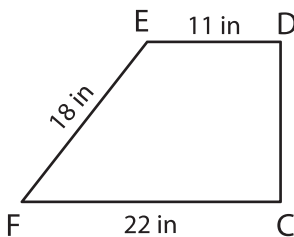
3)



Perimeter = 96 ft

HE = _____

4)



Perimeter = 67 in

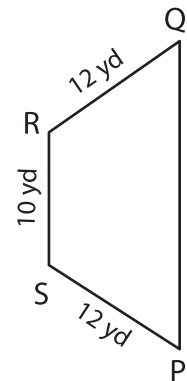
CD = _____

PREVIEW
Gain complete access to the largest collection of worksheets in all subjects!

Members, please log in to download this worksheet.

Not a member? Please sign up to gain complete access.

www.mathworksheets4kids.com



Perimeter = 61 yd

DC = _____

7) The perimeter of a trapezoid is 16 feet, 9 feet and 27 feet, what is the length of the missing side?

8) The perimeter of a trapezoid is 82 inches. If each leg of the trapezoid measures 13 inches and one of the parallel bases is 21 inches, find its other base.
