

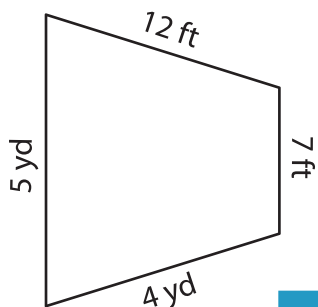
Name : _____

Perimeter of a Trapezoid

Sheet 2

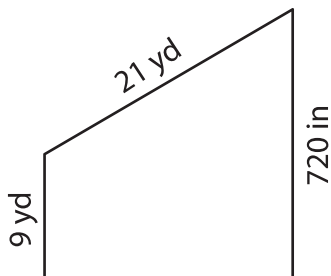
Find the perimeter of each trapezoid.

1)

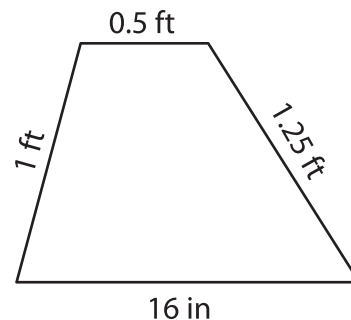


Perimeter = _____

2)

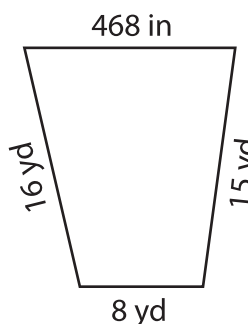


3)



Perimeter = _____ in

4)



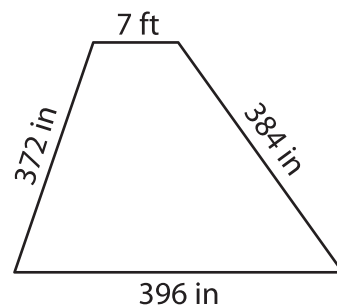
Perimeter = _____

PREVIEW
Gain complete access to the largest collection of worksheets in all subjects!

Members, please log in to download this worksheet.

Not a member? Please sign up to gain complete access.

www.mathworksheets4kids.com



Perimeter = _____ ft

7) Find the perimeter of the

sides and 6 yards.

_____ feet

8) The sides of a trapezoid measure 18 yards, 39 feet, 120 feet and 30 yards. What is the perimeter of the trapezoid?

_____ yards