

Name : _____

Ratio: Part to Part

Level 1: S1

1)



The ratio of  to  is _____.

2)




The ratio of  to  is _____.

3)



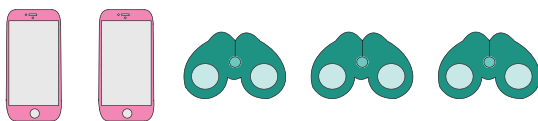
The ratio of  to  is _____.

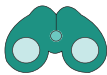

4)



The ratio of  to  is _____.

5)



The ratio of  to  is _____.