

Name : _____

Ratio: Part to Whole


Level 2: S2

1)




The ratio of rings to jewelry is _____ .

2)



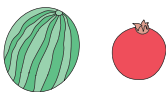
The ratio of _____ .

3)



The ratio of _____ .

4)



The ratio of _____ .

5)



The ratio of birds to parrots is _____ .

PREVIEW

Gain complete access to the largest collection of worksheets in all subjects!

Members, please log in to download this worksheet.

Not a member? Please sign up to gain complete access.

www.mathworksheets4kids.com