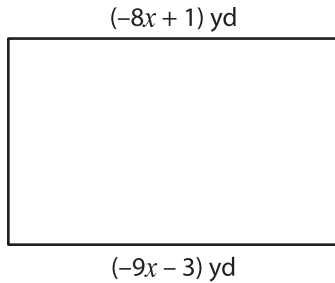


**Length / Width of a Rectangle**

Solve for  $x$  and then find the indicated measure.

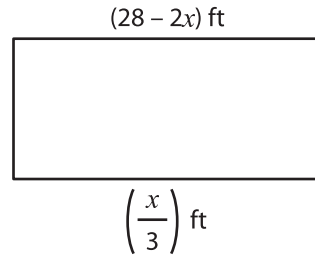
1)



$x =$  \_\_\_\_\_

length = \_\_\_\_\_

2)



$x =$  \_\_\_\_\_

3)



$x =$  \_\_\_\_\_

width = \_\_\_\_\_

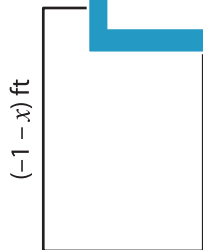
( $3x$ ) yd

( $7x - 4$ ) yd

\_\_\_\_\_

\_\_\_\_\_

5)



$x =$  \_\_\_\_\_

length = \_\_\_\_\_



$x =$  \_\_\_\_\_

width = \_\_\_\_\_

**PREVIEW**

Gain complete access to the largest collection of worksheets in all subjects!

Members, please log in to download this worksheet.

Not a member? Please sign up to gain complete access.

[www.mathworksheets4kids.com](http://www.mathworksheets4kids.com)