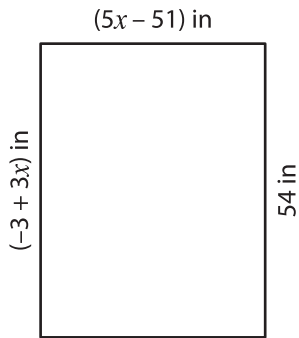


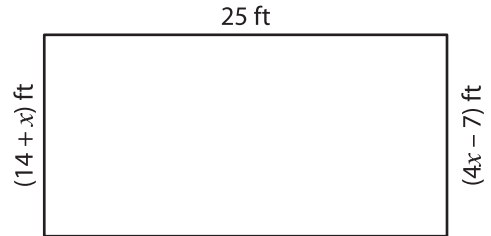
Solving Equations - Perimeter of Rectangles

Solve for x and then find the perimeter of each rectangle.

1)



2)



$x =$ _____

Perimeter = _____


3)



$x =$ _____

Perimeter = _____

$x + 68$ in



PREVIEW

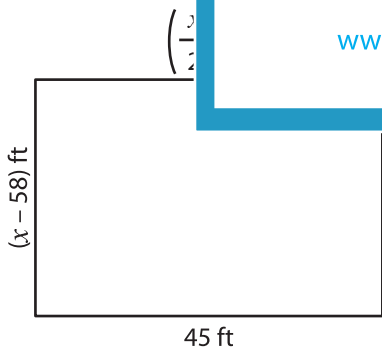
Gain complete access to the largest collection of worksheets in all subjects!

Members, please log in to download this worksheet.

Not a member? Please sign up to gain complete access.

www.mathworksheets4kids.com

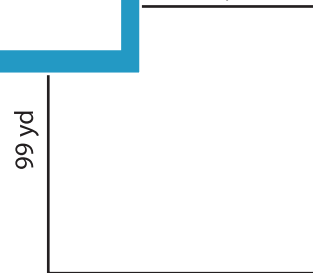
5)



$x =$ _____

Perimeter = _____

$99 + 6 + 9x$ yd



$x =$ _____

Perimeter = _____