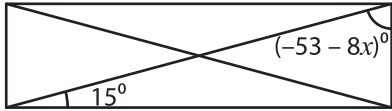


Solving Equations - Angles in Rectangles

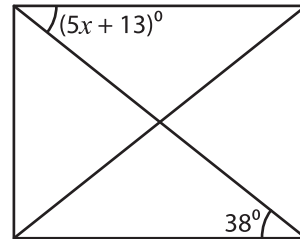
Find the value of x .

1)



$x =$ _____

2)

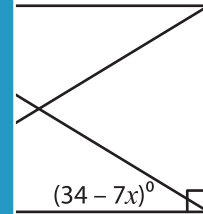


$x =$ _____

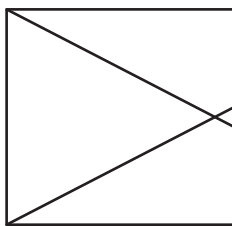
3)



$x =$ _____



5)



$x =$ _____



PREVIEW

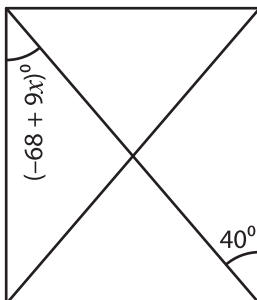
Gain complete access to the largest collection of worksheets in all subjects!

Members, please log in to download this worksheet.

Not a member? Please sign up to gain complete access.

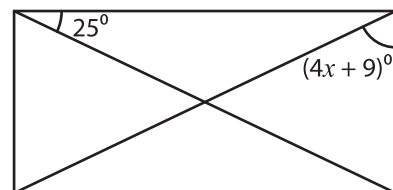
www.mathworksheets4kids.com

7)



$x =$ _____

8)



$x =$ _____