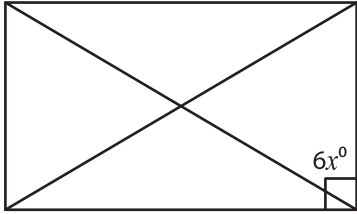


**Solving Equations - Angles in Rectangles**

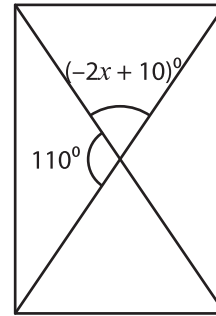
Find the value of  $x$ .

1)



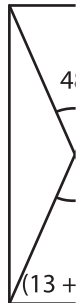
$x =$  \_\_\_\_\_

2)

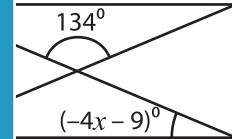


$x =$  \_\_\_\_\_

3)



$x =$  \_\_\_\_\_

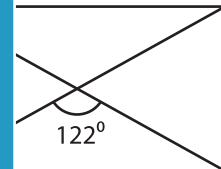


\_\_\_\_\_

5)

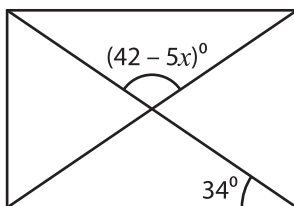


$x =$  \_\_\_\_\_



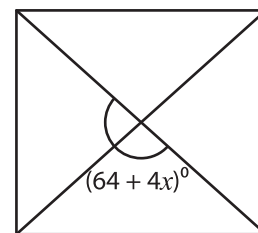
\_\_\_\_\_

7)



$x =$  \_\_\_\_\_

8)



$x =$  \_\_\_\_\_

**PREVIEW**

Gain complete access to the largest collection of worksheets in all subjects!

Members, please log in to download this worksheet.

Not a member? Please sign up to gain complete access.

[www.mathworksheets4kids.com](http://www.mathworksheets4kids.com)