

Name : _____

Perimeter of a Rectangle

Sheet 1

A) Find the diagonal of each rectangle. Round your answer to the nearest tenth.

1) perimeter = 50 in, length = 15 in

2) perimeter = 72 ft, width = 13.8 ft

Diagonal = _____

Diagonal = _____

3) perimeter = 180.9 yd, width = 30.2 yd

4) perimeter = 230 in, length = 60 in

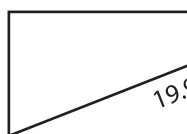
Diagonal = _____

Diagonal = _____

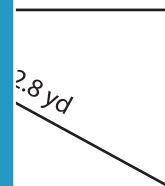
B) Find the perimeter

nearest tenth.

1)



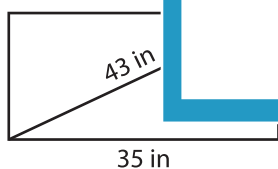
PREVIEW
Gain complete access to the largest collection of worksheets in all subjects!



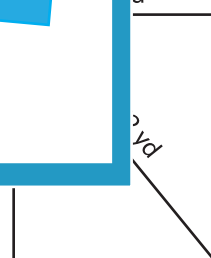
Perimeter = _____



3)



www.mathworksheets4kids.com



Perimeter = _____

Perimeter = _____

C) The perimeter of a rectangle is 145.3 feet. Determine the length of the diagonal, if the width of the rectangle is 27.5 feet. Round your answer to the nearest tenth.
