

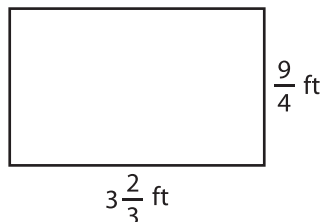
Name : \_\_\_\_\_

## Perimeter of a Rectangle

T1S3

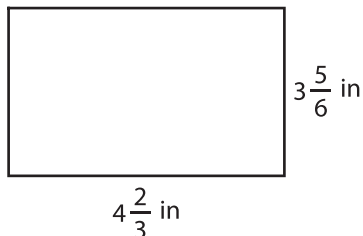
Find the perimeter of each rectangle.

1)



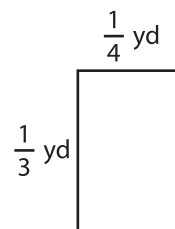
Perimeter =

2)

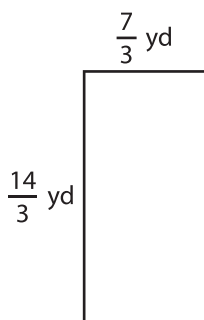


Perimeter =

3)



4)



Perimeter =

# PREVIEW

Gain complete access to the largest collection of worksheets in all subjects!

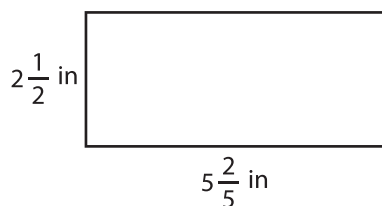
Members, please log in to download this worksheet.

Not a member? Please sign up to gain complete access.

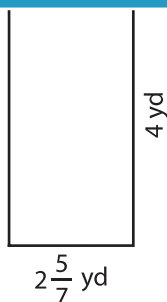
[www.mathworksheets4kids.com](http://www.mathworksheets4kids.com)

Perimeter =

7)

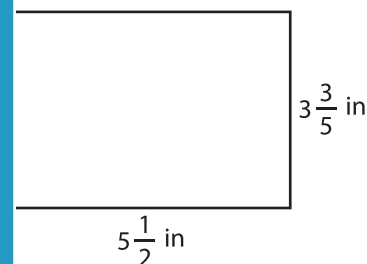


Perimeter =

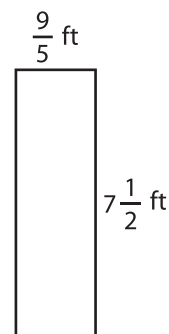


Perimeter =

Perimeter =



Perimeter =



Perimeter =