

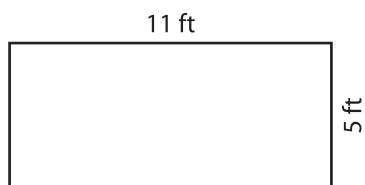
Name : _____

Perimeter of a Rectangle

T1L1S2

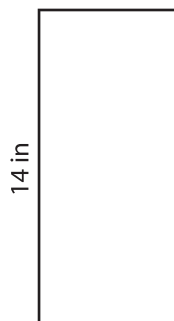
Find the perimeter of each rectangle.

1)



Perimeter =

2)



2 yd

Perimeter =

3)



4)



Perimeter =

PREVIEW
Gain complete access to the largest collection of worksheets in all subjects!


Members, please log in to download this worksheet.

Not a member? Please sign up to gain complete access.

www.mathworksheets4kids.com

12 in

Perimeter =



7)



Perimeter =

10 ft

Perimeter =

8 yd

Perimeter =

