

Name : _____

Sides of a Rectangle

Sheet 1

A) Find the indicated length. Round your answer to the nearest tenth.

1) diagonal = 23 in, length = 19 in

2) width = 6 ft, diagonal = 10 ft

width = _____

length = _____

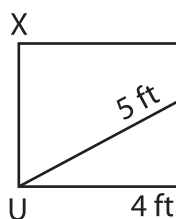
3) width = 27 yd, diagonal = 41.1 yd

4) diagonal = 8.2 in, length = 7.5 in

length = _____

B) Find the unknown length.

5)



Gain complete access to the largest collection of worksheets in all subjects!

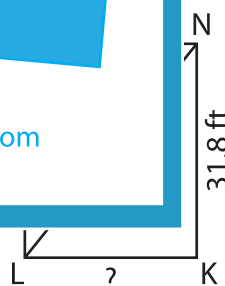
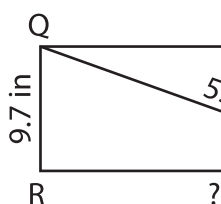
Members, please log in to download this worksheet.

Not a member? Please sign up to gain complete access.

www.mathworksheets4kids.com



7)



9) The diagonal of a rectangle measures 91 yards. What is the width of the rectangle, if the length is 84 yards?