

Name : \_\_\_\_\_

## Sides of a Rectangle

A) Find the indicated length. Round your answer to the nearest tenth.

1) diagonal = 8 yd, width = 5.3 yd

2) diagonal = 32.5 in, length = 28.2 in

length = \_\_\_\_\_

width = \_\_\_\_\_

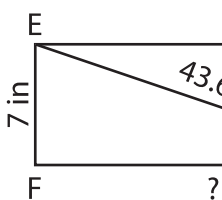
3) length = 24 ft, diagonal = 26 ft

4) width = 9 yd, diagonal = 17 yd

width = \_\_\_\_\_

B) Find the indicated length.

5)



**PREVIEW**  
Gain complete access to the largest collection of worksheets in all subjects!

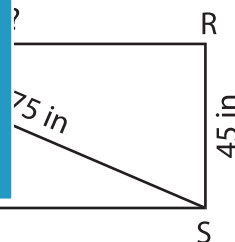
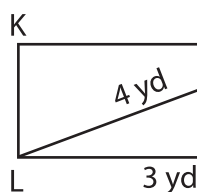
Members, please log in to download this worksheet.

Not a member? Please sign up to gain complete access.

[www.mathworksheets4kids.com](http://www.mathworksheets4kids.com)



7)



9) Determine the length of the rectangle whose width is 31.4 feet and the diagonal measures 59 feet.

\_\_\_\_\_