

Name : _____

Sides of a Rectangle

A) Find the indicated length. Round your answer to the nearest tenth.

1) length = 11.8 ft, diagonal = 15 ft

2) diagonal = 50.5 yd, width = 7 yd

width = _____

length = _____

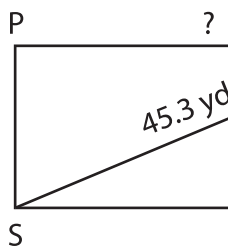
3) diagonal = 37 in, length = 34.2 in

4) diagonal = 9 ft, width = 4.1 ft

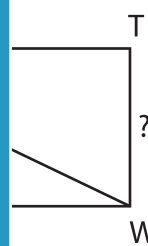
width = _____

B) Find the indicated length.

5)



Gain complete access to the largest collection of worksheets in all subjects!

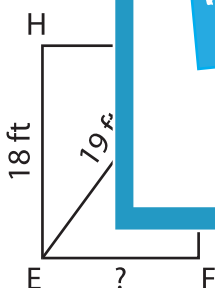


Members, please log in to download this worksheet.

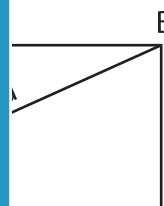
Not a member? Please sign up to gain complete access.

www.mathworksheets4kids.com

7)



D 51 yd A



9) The length of a rectangle is 5.3 inches. If the diagonal measures 6.9 inches, find the width of the rectangle.
