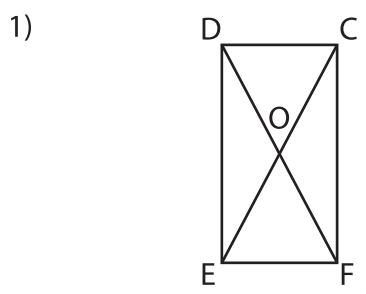
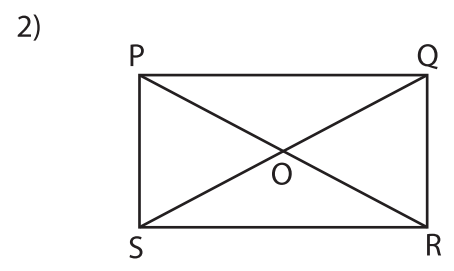


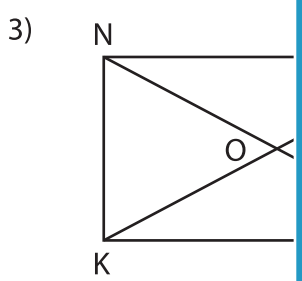
Diagonals of a Rectangle



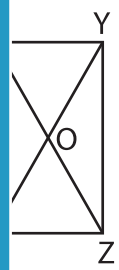
CE = 47.1 in. Find DF.



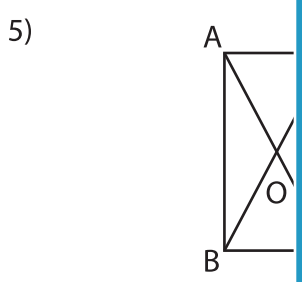
PO = 6.5 yd. Find OR.



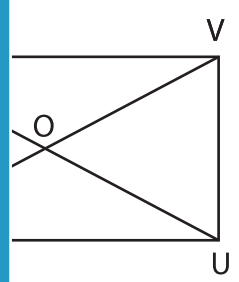
ON = 16 ft. Find



in. Find YO.

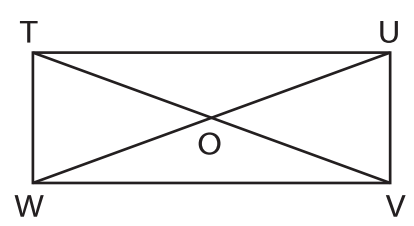


BD = 9 yd. Find



ft. Find XV.

7) TUVW is a rectangle. Find UW, if \overline{OT} measures 37.9 yards.



PREVIEW

Gain complete access to the largest collection of worksheets in all subjects!

Members, please log in to download this worksheet.

Not a member? Please sign up to gain complete access.

www.mathworksheets4kids.com