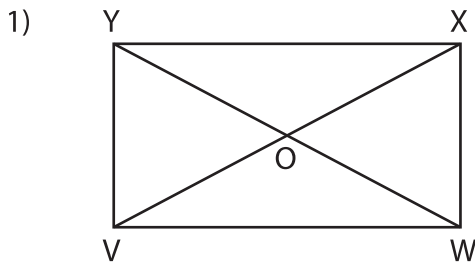


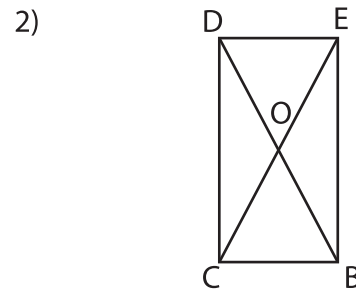
Name : _____

Diagonals of a Rectangle

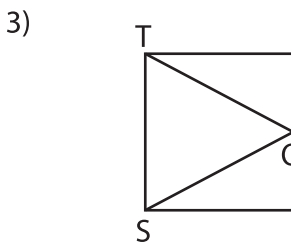
Sheet 3



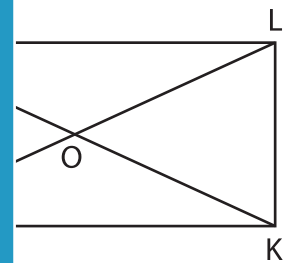
$WO = 10$ yd. Find OY .



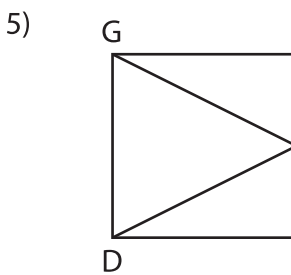
$OC = 33$ ft. Find OD .



$QS = 15.5$ in.



yd. Find LO .



$EG = 37.6$ ft.



h. Find VT .

PREVIEW

Gain complete access to the largest collection of worksheets in all subjects!

Members, please log in to download this worksheet.

Not a member? Please sign up to gain complete access.

www.mathworksheets4kids.com

7) ABCD is a rectangle. If \overline{AC} measures 82 feet, determine OD .

