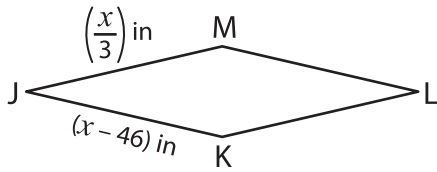


Rhombus

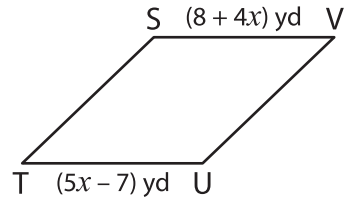
A) Find the value of x and then find the indicated side length in each rhombus.

1)



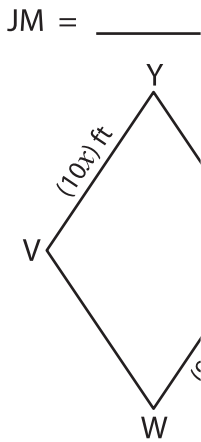
$x =$ _____

2)



$x =$ _____

3)



$x =$ _____

$XY =$ _____

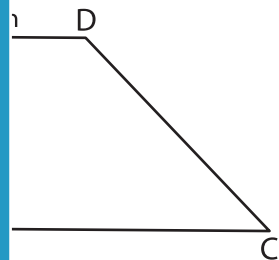
PREVIEW

Gain complete access to the largest collection of worksheets in all subjects!

Members, please log in to download this worksheet.

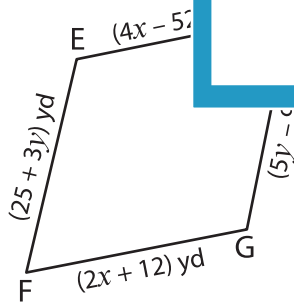
Not a member? Please sign up to gain complete access.

www.mathworksheets4kids.com



B) Solve for x and y and find the indicated side length.

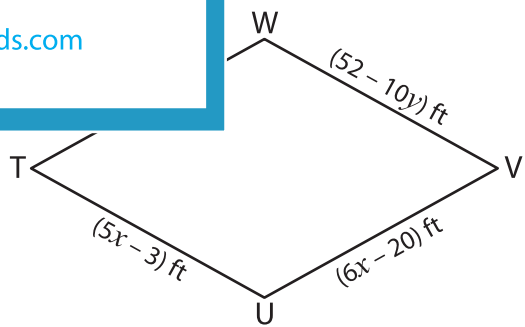
5)



$x =$ _____

$y =$ _____

$EF =$ _____



$x =$ _____

$y =$ _____

$TU =$ _____