

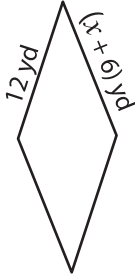
Name : _____

Rhombus

Sheet 1

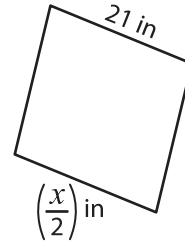
A) Find the value of x in each rhombus.

1)



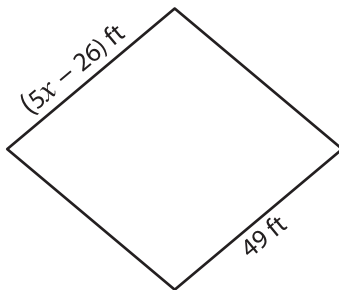
$x =$ _____

2)



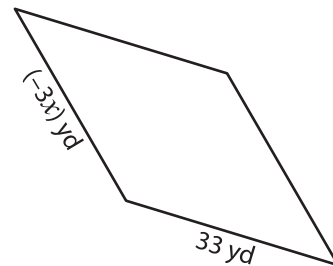
$x =$ _____

3)



$x =$ _____

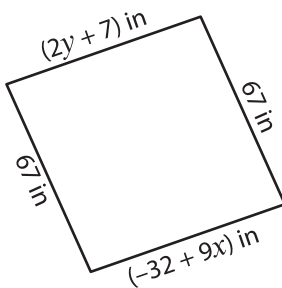
4)



$x =$ _____

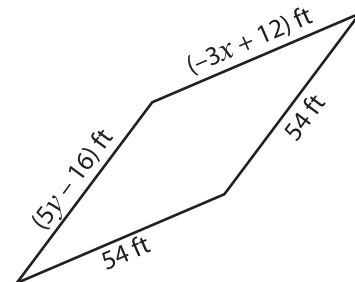
B) Find the value of x and y in each rhombus.

5)



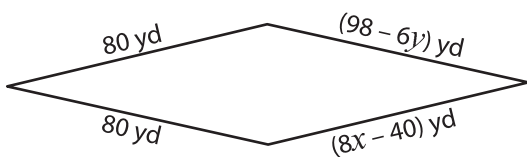
$x =$ _____ ; $y =$ _____

6)



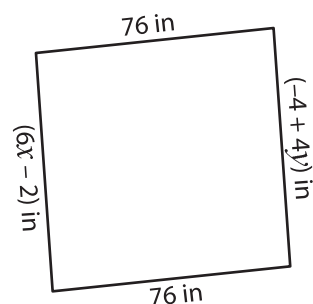
$x =$ _____ ; $y =$ _____

7)



$x =$ _____ ; $y =$ _____

8)



$x =$ _____ ; $y =$ _____