

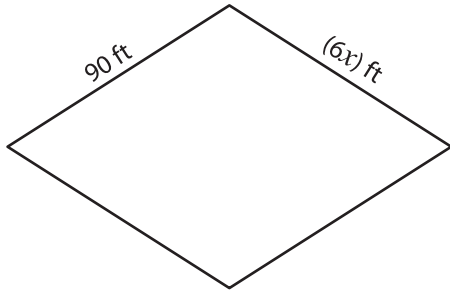
Name : \_\_\_\_\_

# Rhombus

Sheet 3

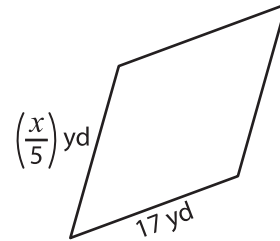
A) Find the value of  $x$  in each rhombus.

1)



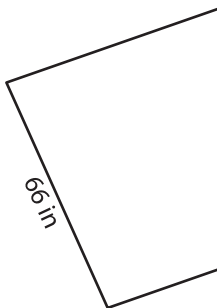
$x =$  \_\_\_\_\_

2)



$x =$  \_\_\_\_\_

3)



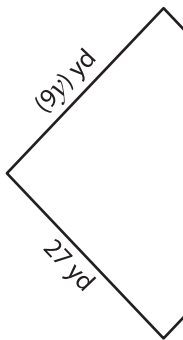
$x =$  \_\_\_\_\_



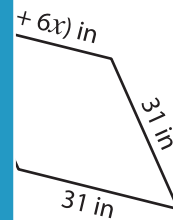
\_\_\_\_\_

B) Find the value of

5)

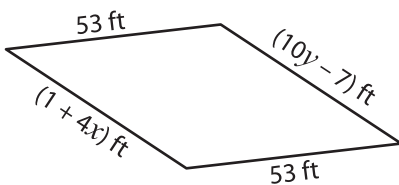


$x =$  \_\_\_\_\_ ;



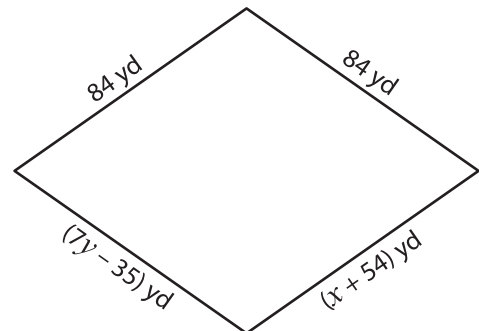
\_\_\_\_\_ ;  $y =$  \_\_\_\_\_

7)



$x =$  \_\_\_\_\_ ;  $y =$  \_\_\_\_\_

8)



$x =$  \_\_\_\_\_ ;  $y =$  \_\_\_\_\_

**PREVIEW**

Gain complete access to the largest collection of worksheets in all subjects!

Members, please log in to download this worksheet.

Not a member? Please sign up to gain complete access.

[www.mathworksheets4kids.com](http://www.mathworksheets4kids.com)