

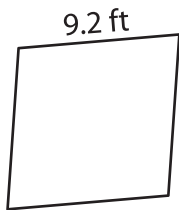
Name : \_\_\_\_\_

## Perimeter of a Rhombus

Sheet 1


Find the perimeter of each rhombus.

1)



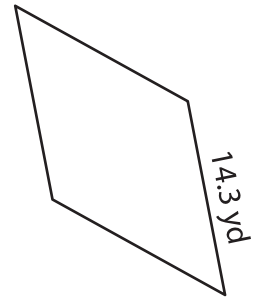
Perimeter = \_\_\_\_\_

2)

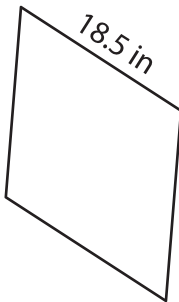


Perimeter = \_\_\_\_\_

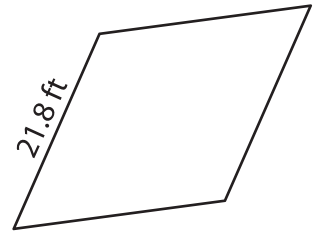
3)



4)



Perimeter = \_\_\_\_\_



Perimeter = \_\_\_\_\_

7) The side of a rhombus m

rhombus.

[www.mathworksheets4kids.com](http://www.mathworksheets4kids.com)

8) The side length of a rhombus is 16.6 inches. Determine its perimeter.