


Name : _____

Perimeter of a Rhombus

Sheet 5

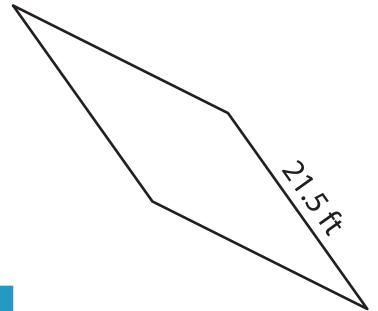
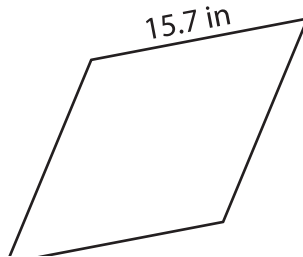
Find the perimeter of each rhombus.

1)



Perimeter = _____

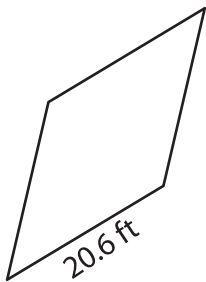
2)



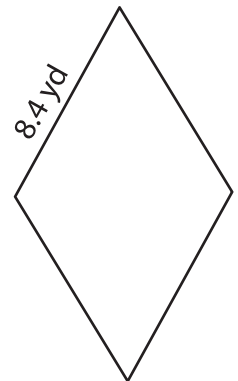
3)

Perimeter = _____

4)



Perimeter = _____



Perimeter = _____

7) If the length of the side of

the rhombus.

PREVIEW

Gain complete access to the largest collection of worksheets in all subjects!

Members, please log in to download this worksheet.

Not a member? Please sign up to gain complete access.

www.mathworksheets4kids.com

8) Find the perimeter of the rhombus, if its side is 7.9 yards long.
