

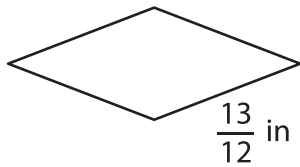
Name : _____

Perimeter of a Rhombus

Sheet 1

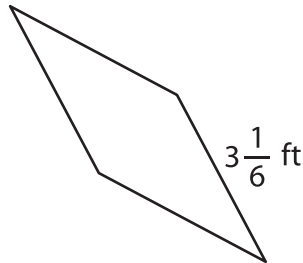
Find the perimeter of each rhombus.

1)



Perimeter = _____

2)



3)

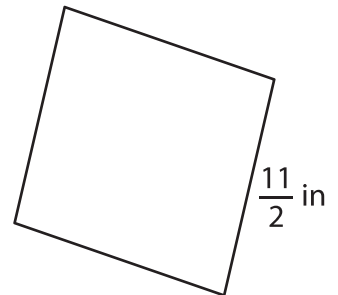


Perimeter = _____

4)



Perimeter = _____



Perimeter = _____

7) The side of a rhombus m

rhombus?

8) The side length of a rhombus is $\frac{1}{7}$ inch. Determine its perimeter.

PREVIEW

Gain complete access to the largest collection of worksheets in all subjects!

Members, please log in to download this worksheet.

Not a member? Please sign up to gain complete access.

www.mathworksheets4kids.com