

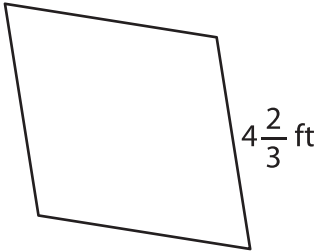
Name : \_\_\_\_\_

## Perimeter of a Rhombus

Sheet 2

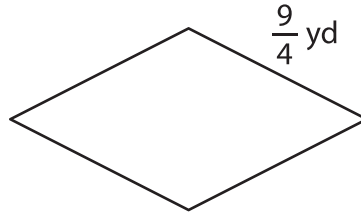
Find the perimeter of each rhombus.

1)



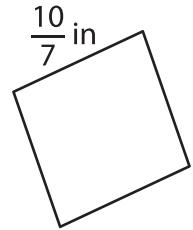
Perimeter = \_\_\_\_\_

2)

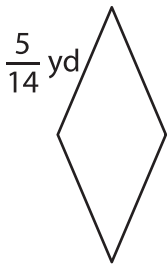


Perimeter = \_\_\_\_\_

3)



4)



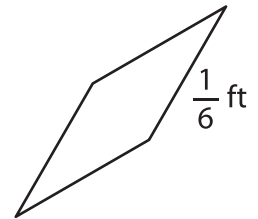
Perimeter = \_\_\_\_\_

**PREVIEW**  
Gain complete access to the largest collection of worksheets in all subjects!

Members, please log in to download this worksheet.

Not a member? Please sign up to gain complete access.

[www.mathworksheets4kids.com](http://www.mathworksheets4kids.com)



Perimeter = \_\_\_\_\_

7) The length of the side of

\_\_\_\_\_

8) Determine the perimeter of the rhombus, if its side length is  $7\frac{1}{2}$  feet.

\_\_\_\_\_