

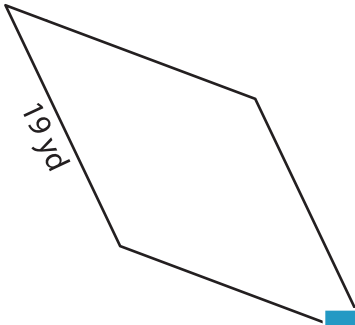
Name : _____

Perimeter of a Rhombus

L1S2

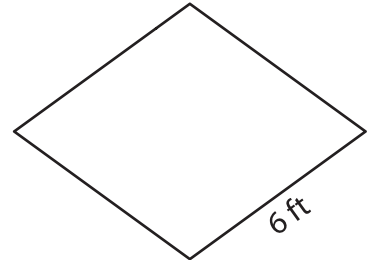

Find the perimeter of each rhombus.

1)



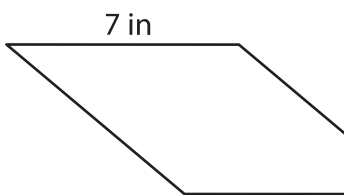
Perimeter = _____

2)

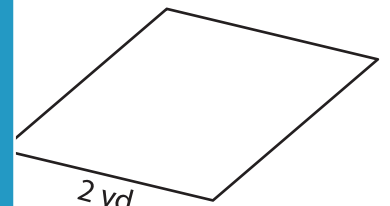


Perimeter = _____

4)



Perimeter = _____



Perimeter = _____

7) If the side length of a rhombus is 5 cm, what is its perimeter?

Perimeter = _____

8) The side of a rhombus measures 8 inches. What is the perimeter of the rhombus?

PREVIEW

Gain complete access to the largest collection of worksheets in all subjects!

Members, please log in to download this worksheet.

Not a member? Please sign up to gain complete access.

www.mathworksheets4kids.com