

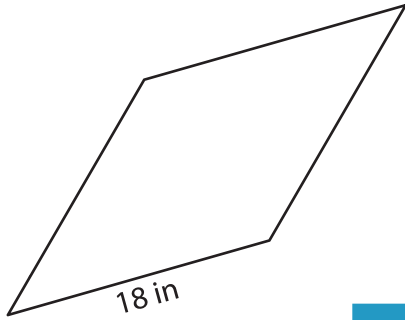
Name : _____

L153

Perimeter of a Rhombus

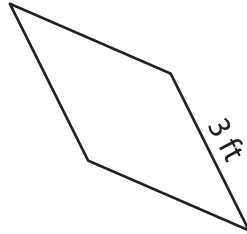
Find the perimeter of each rhombus.

1)

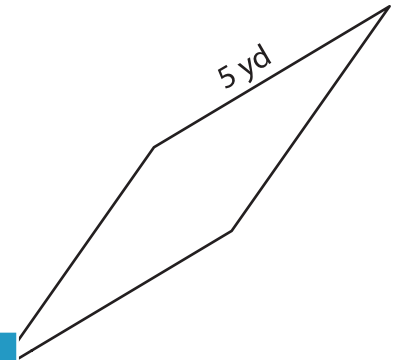


Perimeter = _____

2)

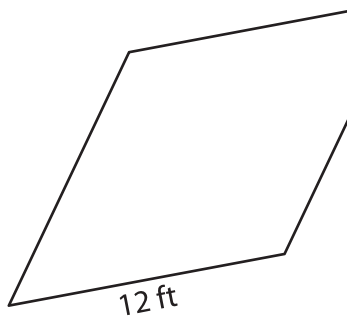


3)



Perimeter = _____

4)



Perimeter = _____



Perimeter = _____

7) If the length of the side of

the rhombus.

PREVIEW

Gain complete access to the largest collection of worksheets in all subjects!

Members, please log in to download this worksheet.

Not a member? Please sign up to gain complete access.

www.mathworksheets4kids.com

8) The side length of a rhombus is 13 feet. Calculate the perimeter of the rhombus.